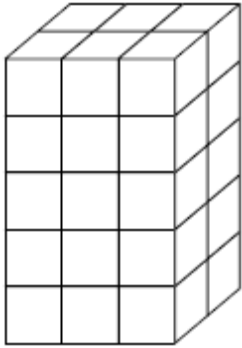


Volume of Rectangular Prisms Notes

Name _____

Volume is measured in _____ units.

1.



How many cubes are in the top layer?

How many layers are there?

How many total cubes would you need to build this structure?

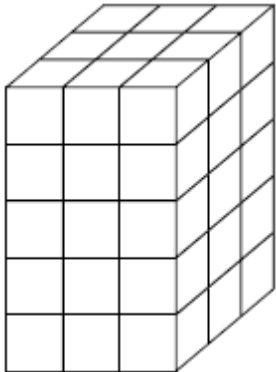
What is the:
length? _____

width? _____

height? _____

How could you use the dimensions to find the volume?

2.



How many cubes are in the top layer?

How many layers are there?

How many total cubes would you need to build this structure?

What is the:
length? _____

width? _____

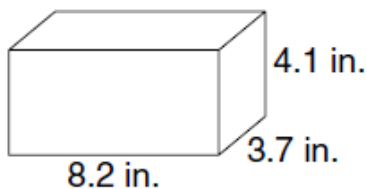
height? _____

How could you use the dimensions to find the volume?

Formula for VOLUME of a Rectangular Prism:

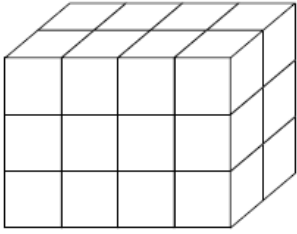
$V =$

3.

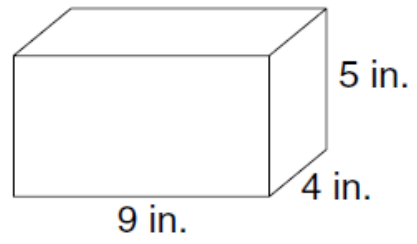


**Pause the video and try the problems on the back on your own!
Then press play and check your answers with a color pen.**

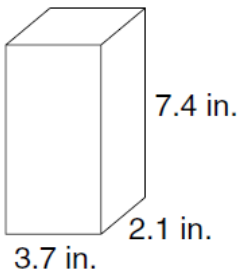
1.



2.



3.



4.

