

Volume of Cylinders Notes

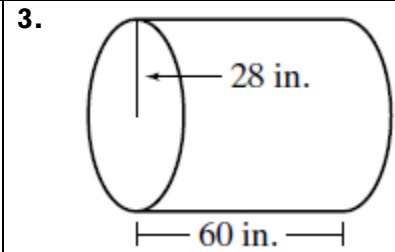
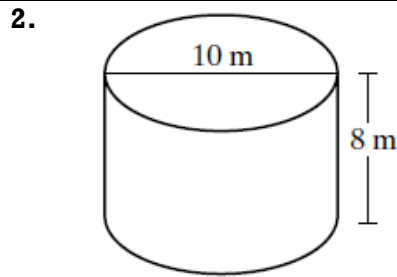
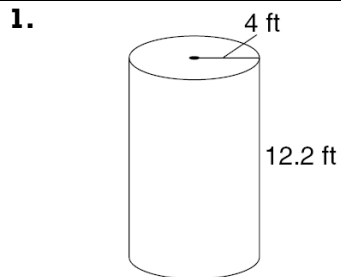
Name _____

Volume is measured in _____ units.

Volume Formula for any right prism

Volume Formula for a Cylinder

Find the volume of each cylinder. Use 3.14 for π . Round to the nearest tenth, if necessary.



**Pause the video and try the problems on the back on your own!
Then press play and check your answers with a color pen.**

